

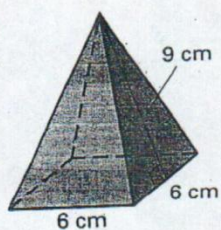
Name: \_\_\_\_\_

Date: \_\_\_\_\_

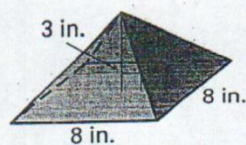
## PYRAMIDS PRACTICE

Find the lateral area and the surface area.

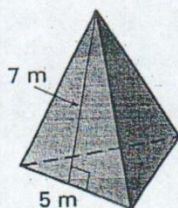
①



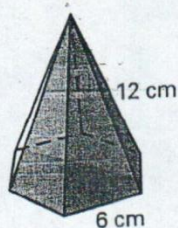
②



③

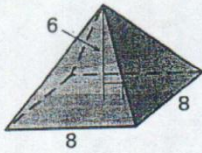


④

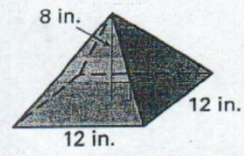


Find the volume.

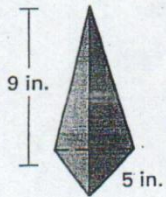
⑤



⑥



⑦



⑧

